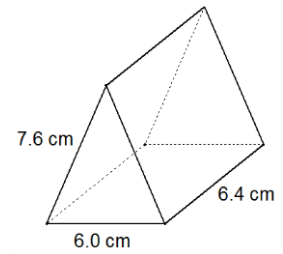
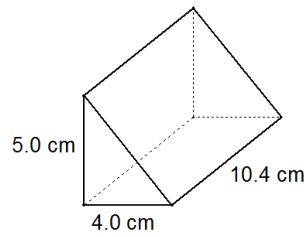
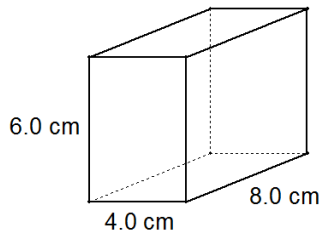


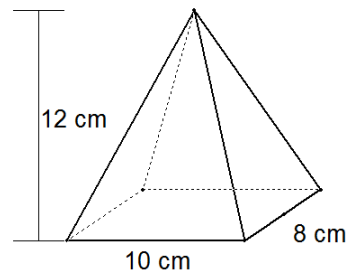
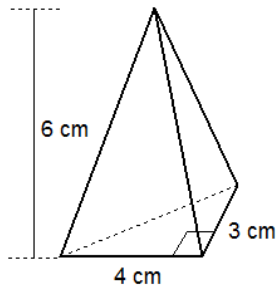
# Volume of Prisms, Pyramids, Cones and Spheres

1. Determine the volume of each geometric solid shown below.



2. The formula for the volume of a **rectangular-** or **triangular-**based prism is the same as the formula for the volume of a **square-**based pyramid.

Determine the volume of each pyramid shown below.



3. Find the volume of each solid.

