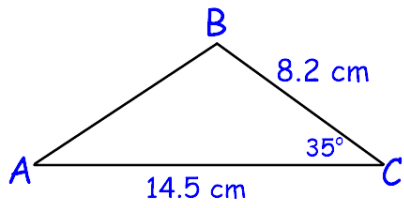
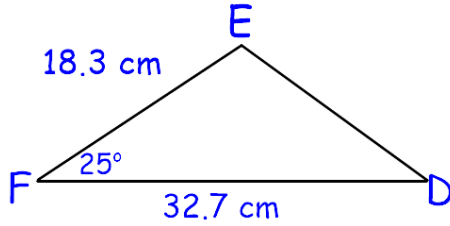


The Cosine Law

Solving for a side.

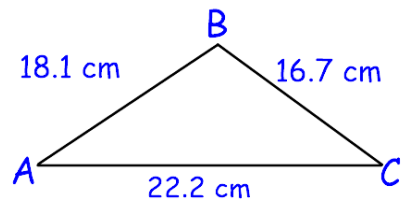


Determine the length of side c.

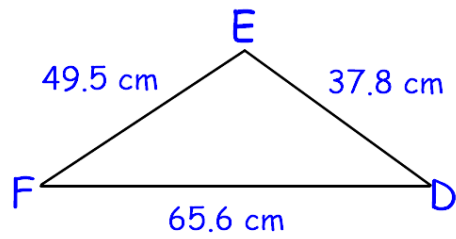


Determine the length of side f.

Solving for an angle.



Determine the measure of angle C.



Determine the measure of angle E.